

A



1



2



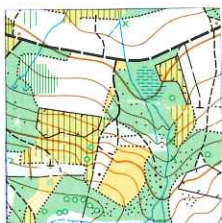
3



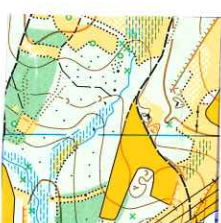
4



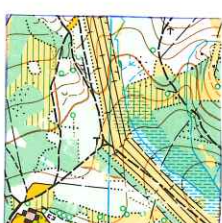
5



6



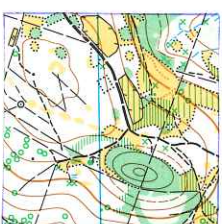
7



8



9



10



11



12

B



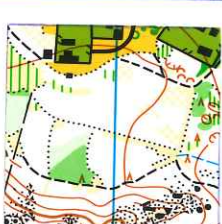
13



14



15



16



17



18



19



20



21



22



23



24

1. URČI NA KTERÉ STRANĚ KARTIČKY JE SEVER
2. URČI MĚŘÍTKO MAPY „A“ A MAPY „B“
3. V POLÍČKU 19 URČI CO NEJVÍCE MAPOVÝCH ZNAČEK
4. VE KTERÉM POLÍČKU NADEŠ ROZHLEDNU
5. URČI AZIMUT MEZI POSEDEM A KAMELEM V POLÍČKU Č.8