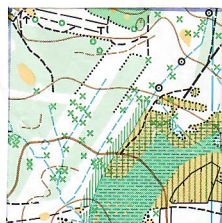
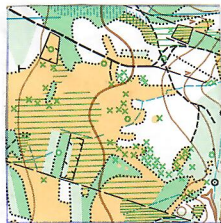


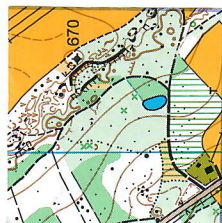
A



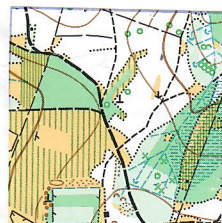
1



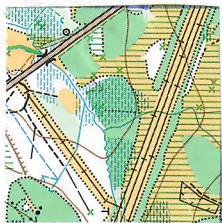
2



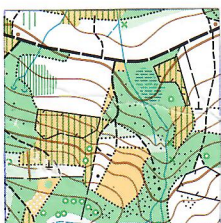
3



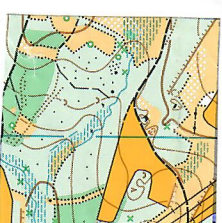
4



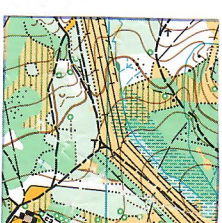
5



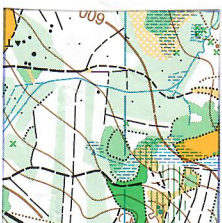
6



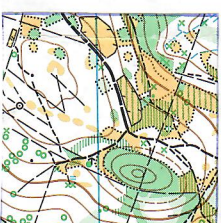
7



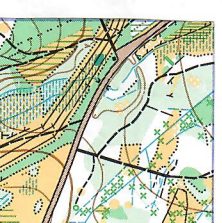
8



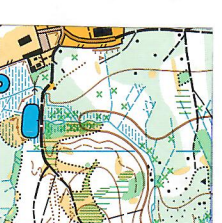
9



10

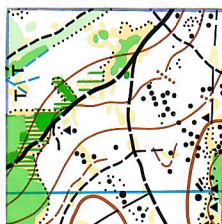


11

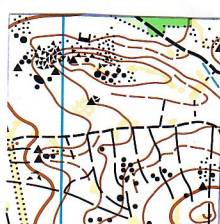


12

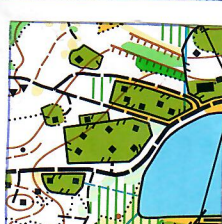
B



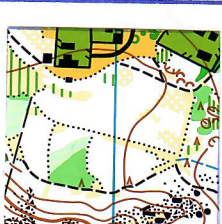
13



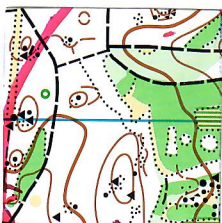
14



15



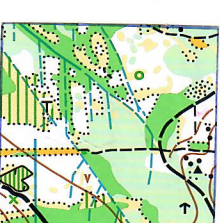
16



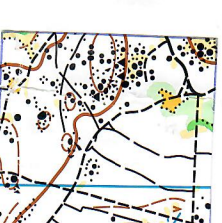
17



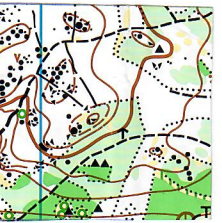
18



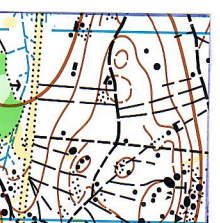
19



20



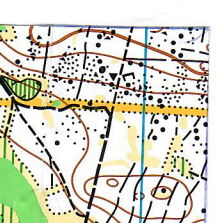
21



22



23



24

1. URČI NA KTERÉ STRANĚ KARTIČKY JE SEVER
2. URČI MĚŘÍTKO MAPY „A“ A MAPY „B“
3. V POLÍČKU 19 URČI CO NEJVÍCE MAPOVÝCH ZNAČEK
4. VE KTERÉM POLÍČKU NAJDEŠ ROZHLEDNU
5. URČI AZIMUT MEZI POSEDEM A KRMELCEM V POLÍČKU Č.8